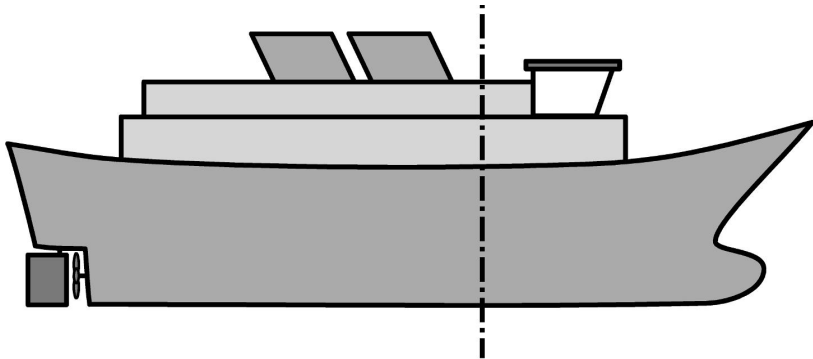
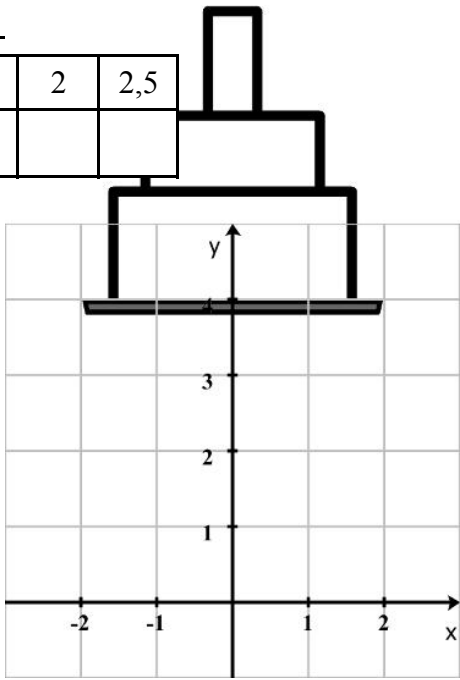


# Schaubilder von quadratischen Gleichungen


## Schiffsrumpf

x	-2,5	-2	-1,5	-1	-0,5	0	0,5	1	1,5	2	2,5
$y=x^2$											



## Bistrotisch

x	0	0,5	1	1,5	2	2,5	3	3,5	4	4,5	5	5,5	6
$y=x^2-6x$													



## Brückenbau

$x$	0,5	1	1,5	2	2,5	3	3,5	4	4,5	5	5,5
$y = -(x^2) + 6x - 5$											

